

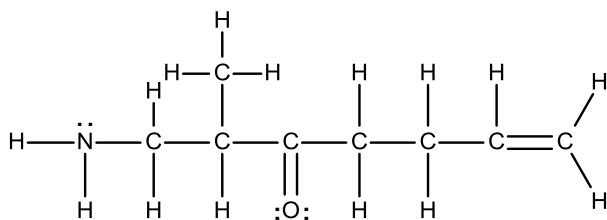
Name: _____

Essential Outcome 2 Evaluation

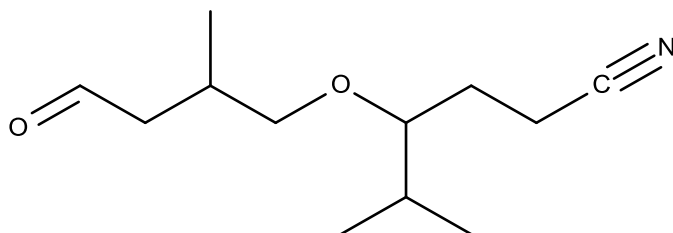
CHE201.01; 9.5.2016

Mastery is considered demonstrated with 4 of 5 complete, correct answers.

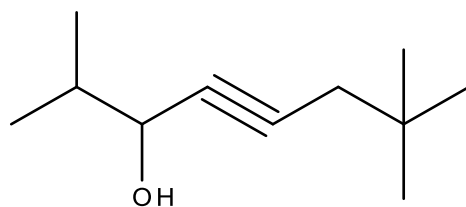
1) For the below Lewis Dot Structure, give a condensed formula **and** line-angle structure.



2) Circle and name the functional groups in the below molecule:



3) For the below Line-Angle structure, give the condensed formula.



4) Draw the Line-Angle structure for any 6-carbon ester.